

Halfway Down



Halfway down the stairs
is a stair
where i sit.
there isn't any
other stair
quite like
it.
i'm not at the bottom,
i'm not at the top;
so this is the stair
where
I always
stop.

Halfway up the stairs
Isn't up
And it isn't down.
It isn't in the nursery,
It isn't in town.
And all sorts of funny thoughts
Run round my head.
It isn't really
Anywhere!
It's somewhere else
Instead!

Phase 4 High Frequency Words Writing Practice



Look and say



Look, say and write



Say and trace



Cover and write

went

went

it's

it's

from

from

children

children

just

just

help

help

said

said

have

have

like

like

Phase 4 High Frequency Words Writing Practice



Look and say



Look, say and write



Say and trace



Cover and write



Yes/no questions

Can a clock get cross?

Can a crab clap hands?

Are you fond of plums?

Can you bang on a big black drum?

Can a spoon grab a fork?

Is the moon green?

Are all children good at sports?

Have you seen a trail left by a snail?

Do fish paint windmills?

Do you want to fly in the sky?

Can we see the stars on a clear night?

Do bats come out at night?

Can letters have stamps stuck on them?

Are you afraid of thunderstorms?

Do trains run on tracks?

Will a lolly melt in the sun?

Are tree trucks soft?

Do some dogs have black spots?

Have you ever slept in a tent?

Have you been to Manchester?

Do you have a lunchbox?

Can you smell burnt driftwood?

Are all fish good at swimming?

Do you have some milkshake?

Can a tree shrink?

Will the snow fall in winter?

Ordering Coins

Cut and paste the coins below and arrange them from smallest value to largest value in the boxes.

--	--	--	--	--	--	--	--

Smallest value

Largest value




visit [twinkl.com](https://www.twinkl.com)



How Much Do the Ice Creams Cost?

How much does each ice cream cost? Look at the coins and write the total amount in the circle.



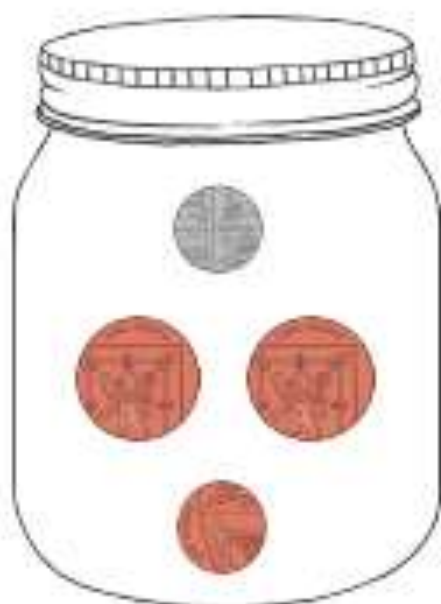
How Much Do the Ice Creams Cost?

How much does each ice cream cost? Look at the coins and write the total amount in the circle.



How Much Money Is in My Jar?

Making Different Amounts within 20




How Much Money Is in My Jar?

Making Different Amounts within 20



Day 5 –



How Much Money Is in My Jar?

Making Different Amounts within 20

