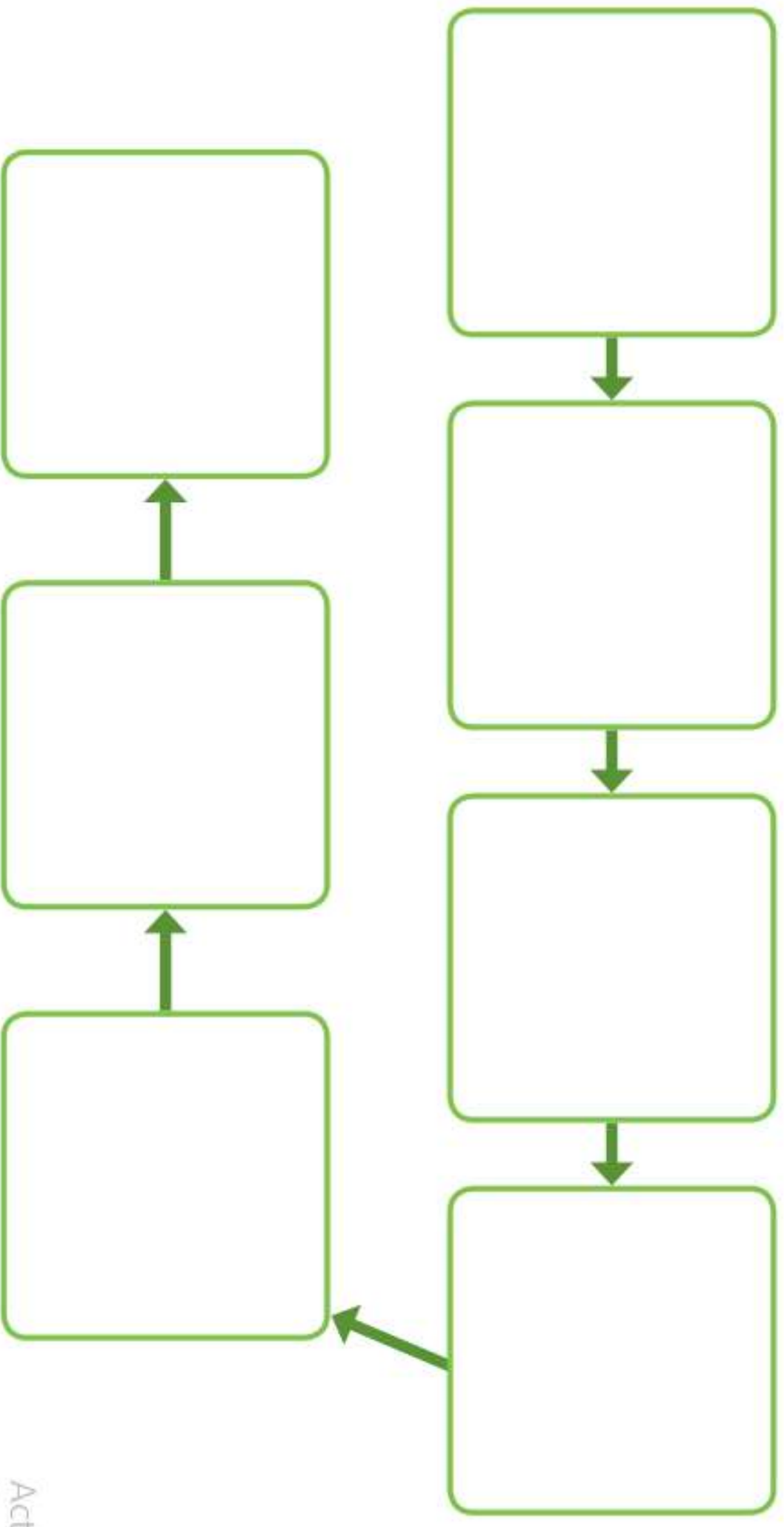


Bean Plant Growth Sequencing



Fill the plant pot
with soil.



twinkl.com

Make a hole in the
soil with your finger.



twinkl.com

Place bean in the
hole and cover with
more soil.



twinkl.com

Use a watering can
or spray bottle to
dampen the soil.



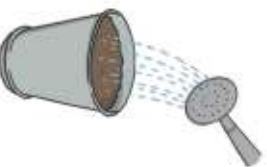
twinkl.com

Put plant in a
sunny location.



twinkl.com

Continue to water
regularly.




twinkl.com

Soon, your bean will
begin to sprout.



twinkl.com




Use objects, or your fingers, to work out these number sentences.



$$1 + 8 =$$



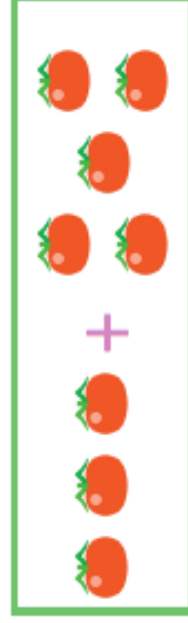
$$5 + 2 =$$



$$4 + 7 =$$



$$3 + 7 =$$



1. Circle the correct statement below.




nearly empty

nearly full

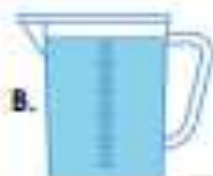
half full

2. Zara needs a cup that is full.



Which cup should she choose?

3. Put an 'X' next to the correct statement.



1. B has a greater volume than A.

2. The jugs have an equal volume.

4. Choose the correct word card to complete the statement.



is _____



greater than

less than

5. Match each jug to the correct label.



half full

nearly empty

6. Jack says,



The jug is nearly full.



Is he correct? Explain your answer.

7. Complete the sentences below.



1. Cup has the greatest volume.

2. B has a greater volume than .

3. Cup is half full.

Gather a selection of toys and objects from around your home. Using your hands to compare the items, can you sort them into heavy and light?



1. Choose the correct word to complete the sentence below.



The apple is than the cupcake.

heavier

lighter

4. Put an 'X' next to the incorrect statement.



A. The ball is heavier than the dice.

B. The dice is lighter than the ball.

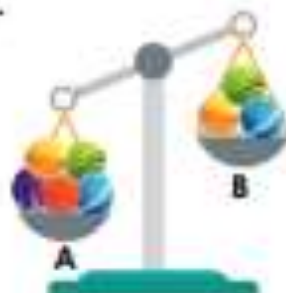
C. The toys are an equal weight.

2. Two pears are an equal weight to four pencils.



How many pencils would one pear weigh?

5. Hettie thinks if she removes one marble from cup A, the scales will be balanced.



Is she correct? Explain your answer.

3. Jo has weighed objects using marbles.

Object	Marbles
Pen	
Glue Stick	
Ruler	

Order the objects from lightest to heaviest.

6. What combination of fruit will balance the scales?

= 5 blocks
 banana
 = 2 blocks
 apple
 = 3 blocks
 lemon
 = 1 block
 plum

Find 2 possible answers.

1. Complete the sentences to match the scales.



The train weighs blocks.



The duck weighs acorns.



The ball weighs cubes.

2. Put an 'X' next to the correct sentence.



A. The apple weighs 7 cubes.



B. The carrot is lighter than 4 cubes.



C. The pear weighs less than 6 cubes.

3. Which two items would balance the scales?



3 cubes	4 cubes	5 cubes	6 cubes	7 cubes
				
pinwheel	paint	spinning top	boat	trumpet

Find two possibilities.

Circle the pictures that have the long 'oo' sound in the middle.



Can you draw a picture of something that has the 'oo' sound in the middle?

You might find something in your house!

Circle the pictures that have the short 'oo' sound in the middle.



Can you draw a picture of something that has the short 'oo' in the middle?

You might find something in your house!

Circle the pictures that have the 'ar' sound in the middle, or at the end.



Can you draw a picture of something that has the 'ar' sound in the middle?

You might find something in your house!

Circle the pictures that have the 'or' sound in the middle.



Can you draw a picture of something that has the 'or' sound in the middle?

You might find something in your house!

Read the 'tricky' words in red to an adult. Draw a line to its matching pair.

he

we

we

she

me

be

she

he

be

me

Phonics – Writing Tricky Words

Read the tricky word to an adult.

Cover it up then see if you can write it correctly on the line.

she

me

we

be

he
